


Identify the Decimal Number Line: Multiple Choice

Find the exact value from the decimals on the number line.

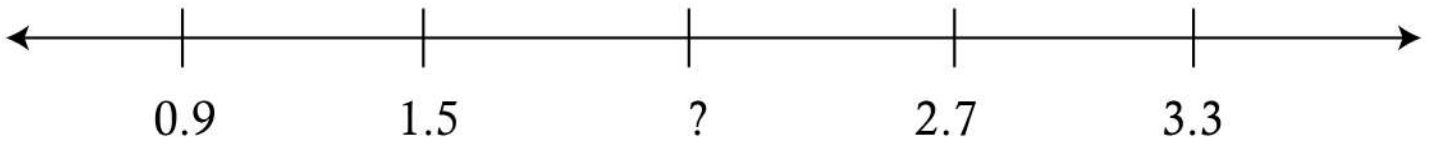


a) 8.8

b) 2.7

c) 4.3

d) 1.2

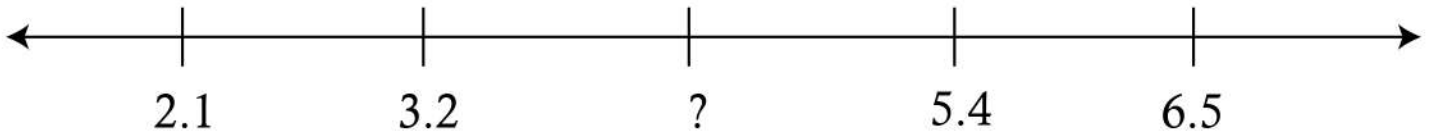


a) 3.4

b) 2.1

c) 1.9

d) 1.5

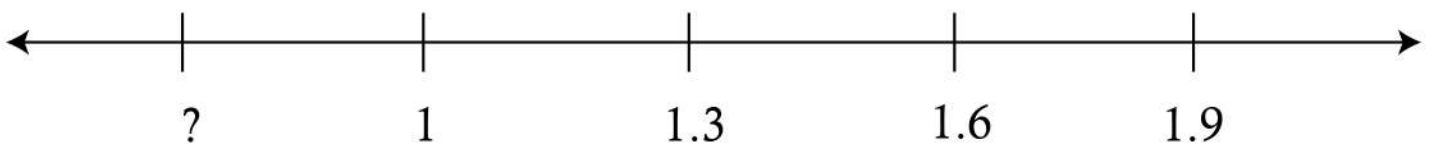


a) 4.4

b) 3.3

c) 4.3

d) 4.5

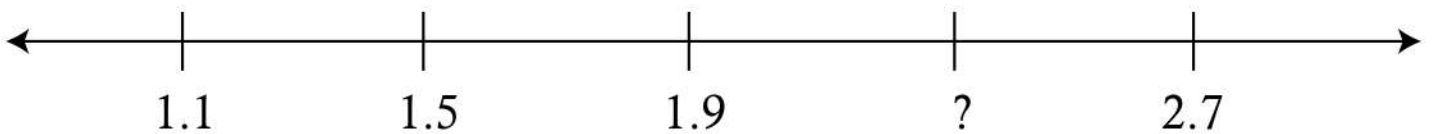


a) 0.7

b) 2.7

c) 4.1

d) 4.5



a) 1.2

b) 0.9

c) 1.3

d) 2.3

