
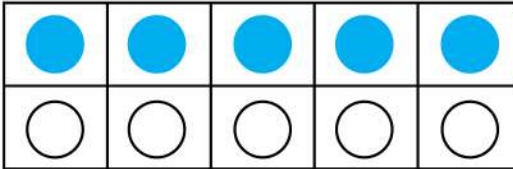
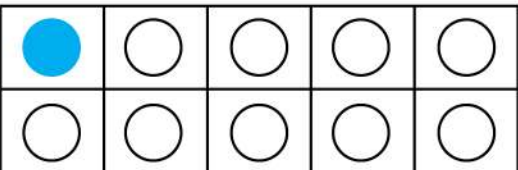
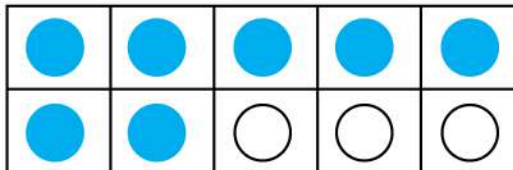


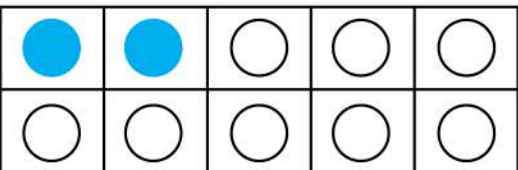
# Worksheet for Making 10 on a Ten Frame with One Addend Missing

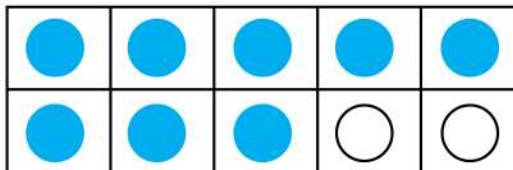
1.   
 $6 + \underline{\quad} = 10$

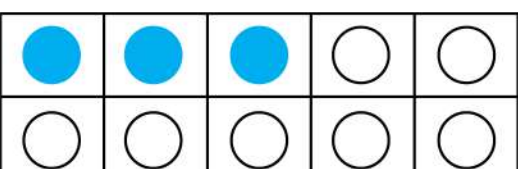
6.   
 $5 + \underline{\quad} = 10$

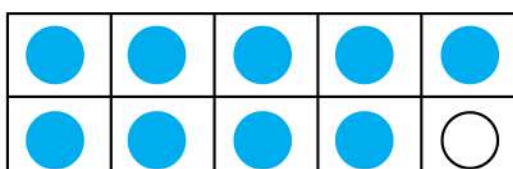
2.   
 $1 + \underline{\quad} = 10$

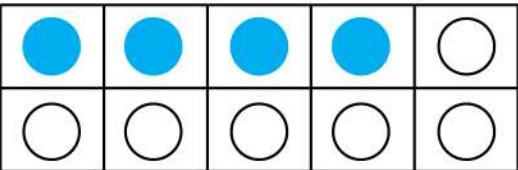
7.   
 $7 + \underline{\quad} = 10$

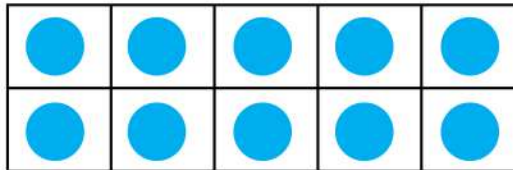
3.   
 $2 + \underline{\quad} = 10$

8.   
 $8 + \underline{\quad} = 10$

4.   
 $3 + \underline{\quad} = 10$

9.   
 $9 + \underline{\quad} = 10$

5.   
 $4 + \underline{\quad} = 10$

10.   
 $10 + \underline{\quad} = 10$