

Number Bonds to 1000 | Missing Addends

1) $520 + \underline{\hspace{2cm}} = 1000$

9) $\underline{\hspace{2cm}} + 320 = 1000$

2) $280 + \underline{\hspace{2cm}} = 1000$

10) $900 + \underline{\hspace{2cm}} = 1000$

3) $\underline{\hspace{2cm}} + 350 = 1000$

11) $810 + \underline{\hspace{2cm}} = 1000$

4) $\underline{\hspace{2cm}} + 180 = 1000$

12) $\underline{\hspace{2cm}} + 130 = 1000$

5) $750 + \underline{\hspace{2cm}} = 1000$

13) $\underline{\hspace{2cm}} + 470 = 1000$

6) $580 + \underline{\hspace{2cm}} = 1000$

14) $980 + \underline{\hspace{2cm}} = 1000$

7) $\underline{\hspace{2cm}} + 680 = 1000$

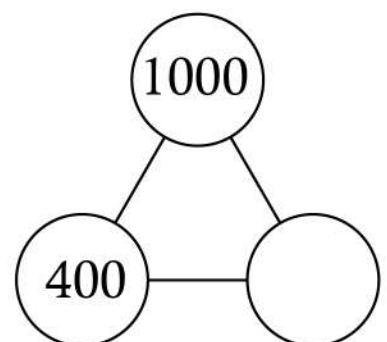
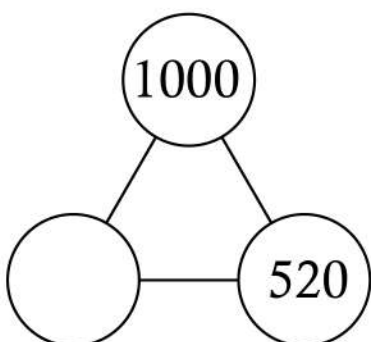
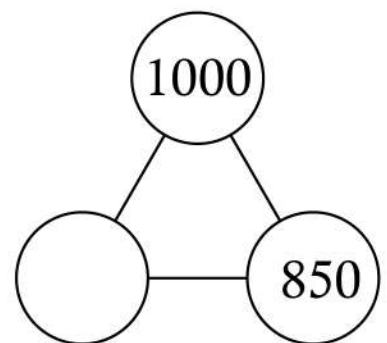
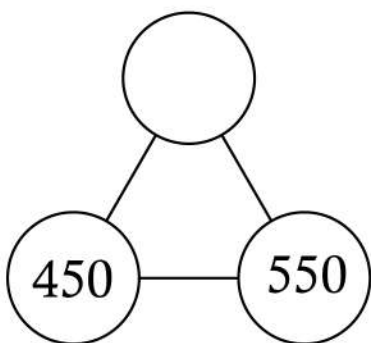
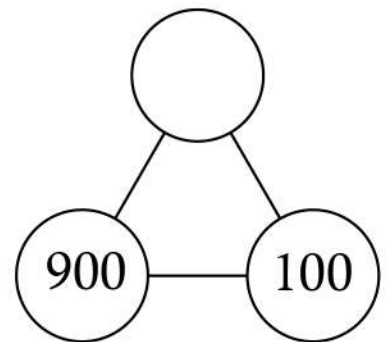
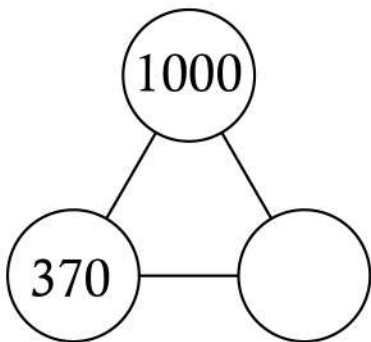
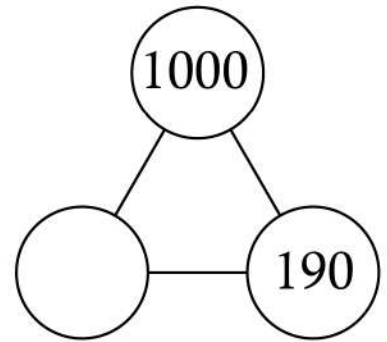
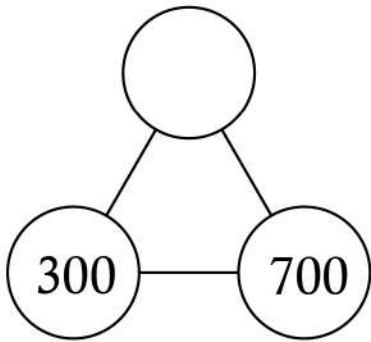
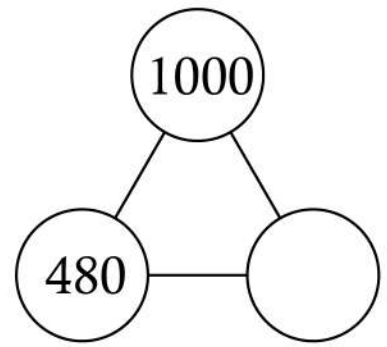
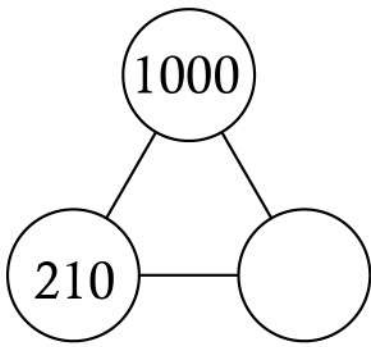
15) $\underline{\hspace{2cm}} + 190 = 1000$

8) $720 + \underline{\hspace{2cm}} = 1000$

16) $\underline{\hspace{2cm}} + 490 = 1000$

Name: _____

Number Bonds to 1000 | Missing Addends



Number Bonds to 1000 | Missing Addends

1000	
525	

1000	
	675

1000	
755	

1000	
289	

555	445

1000	
	782

1000	
	165

350	650

1000	
157	

1000	
910	