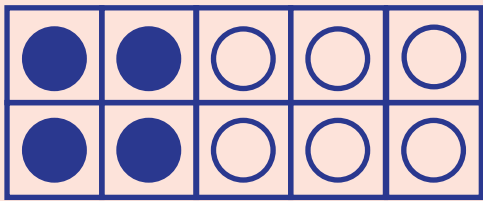
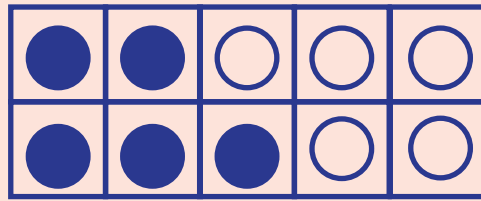


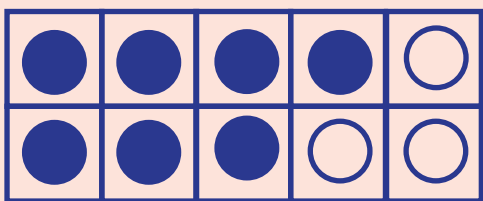
# Make 10 with Ten Frames



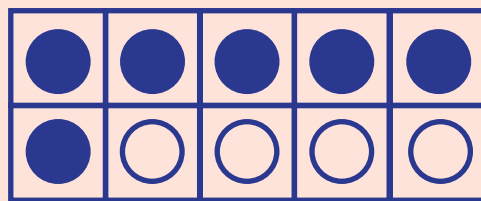
$4 + \underline{\quad} = 10$



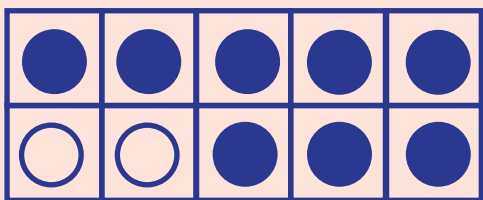
$5 + \underline{\quad} = 10$



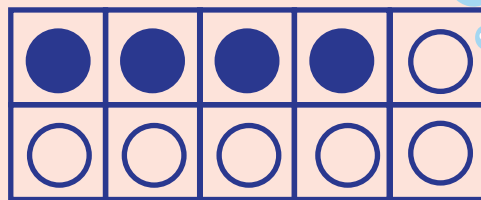
$7 + \underline{\quad} = 10$



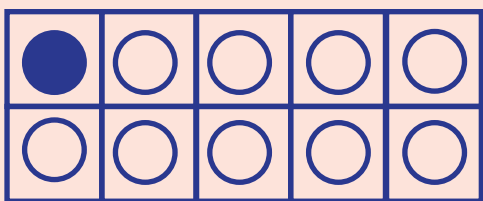
$6 + \underline{\quad} = 10$



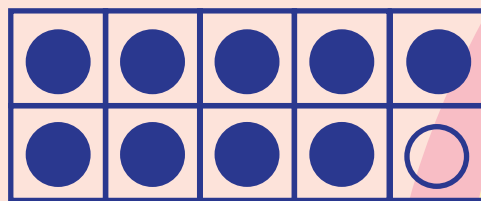
$8 + \underline{\quad} = 10$



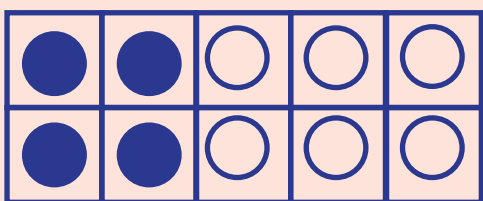
$4 + \underline{\quad} = 10$



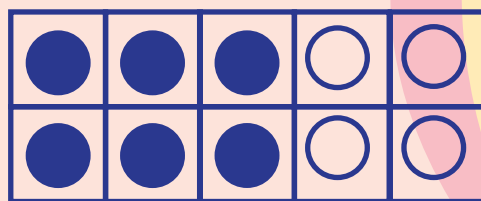
$1 + \underline{\quad} = 10$





$9 + \underline{\quad} = 10$



$4 + \underline{\quad} = 10$



$6 + \underline{\quad} = 10$



# Addition with Ten Frames



●	●	●		
●	●	●		

 + 

●	●	●	●	

 =

●	●			

 + 

●	●	●	●	●

 =

●	●	●	●	●

 + 

●	●	●	●	●
●	●			

 =

●	●			
●	●			

 + 

●	●	●	●	●
●	●	●	●	


 =

●	●	●	●	
●	●			

 + 

●	●	●		
●	●	●		

 =



# Addition with Ten Frames



●	●	●	●	
●	●	●		

 + 

●	●	●	●	

 =

●	●			
●	●			

 + 

●	●	●	●	

 =

●	●	●	●	●
●	●			

 + 

●	●	●	●	●
●	●			

 =

●	●	●		
●	●			

 + 

●	●	●	●	
●	●	●	●	

 =

●	●	●		
●	●			

 + 

●	●	●		
●	●			

 =

