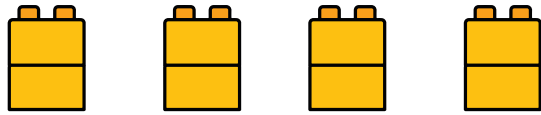
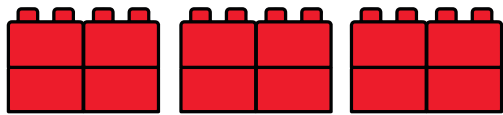


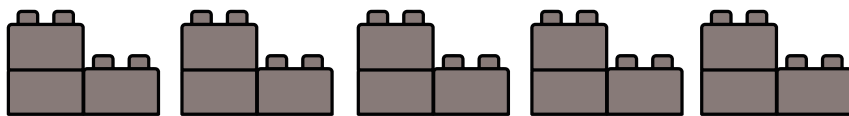
1.  $2 + 2 + 2 + 2 = ?$



2.  $4 + 4 + 4 = ?$



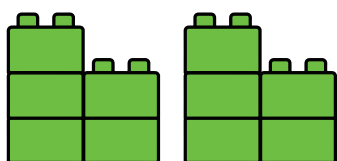
3.  $3 + 3 + 3 + 3 + 3 = ?$




4.  $1 + 1 + 1 + 1 + 1 + 1 = ?$




5.  $5 + 5 = ?$




1.  $5 + 5 + 5 = ?$




2.  $6 + 6 = ?$



3.  $7 + 7 = ?$




4.  $3 + 3 + 3 = ?$



5.  $1 + 1 + 1 + 1 + 1 = ?$



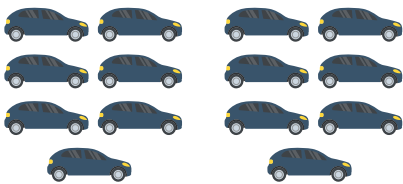
1.  $9 + 9 = ?$




2.  $5 + 5 + 5 = ?$




3.  $7 + 7 = ?$



4.  $10 + 10 + 10 + 10 = ?$




5.  $8 + 8 + 8 + 8 = ?$



1.  $1 + 1 + 1 + 1 + 1 = ?$




2.  $6 + 6 + 6 + 6 + 6 = ?$



3.  $4 + 4 + 4 = ?$



4.  $5 + 5 + 5 = ?$



5.  $1 + 1 + 1 + 1 = ?$

