

# Comparative Measurement Puzzle



A



B



C



D



E

1) Which is the largest pencil here?

=     C    

2) How many pencils are over 4 inches?

= \_\_\_\_\_

3) Which one is the largest between "A" and "C"?

= \_\_\_\_\_

4) The length of pencil "E" is \_\_\_\_\_ inches.

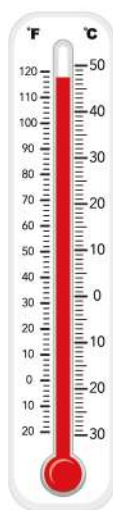
5) Which is the smallest pencil among these five?

= \_\_\_\_\_


6) Which one is the smallest between "B", "C", and "D"?

= \_\_\_\_\_

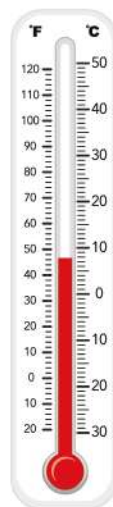
# Comparative Measurement Puzzle




A



B



C



D

1) Which thermometer shows the lowest temperature?

= \_\_\_\_\_

2) Which one is hotter between "A" and "D"?

= \_\_\_\_\_

3) Thermometer "C" shows \_\_\_\_\_ degree fahrenheit.

4) Which one is cooler between "B" and "C"?

5) What is the highest temperature among the four thermometers?

= \_\_\_\_\_

6) Thermometer "A" shows \_\_\_\_\_ degree celsius and \_\_\_\_\_ degree fahrenheit.