



Name: _____


Worksheet for Addition Sentence Equations

Find the missing number and color the circles.


1. $2 + \underline{5} = 7$



2. $1 + \underline{\quad} = 5$




3. $1 + \underline{\quad} = 6$



4. $3 + \underline{\quad} = 7$




5. $5 + \underline{\quad} = 8$



6. $1 + \underline{\quad} = 4$



7. $3 + \underline{\quad} = 8$



8. $2 + \underline{\quad} = 6$

