




Name: \_\_\_\_\_


# Worksheet for Addition Sentence Equations

Find the missing number and color the circles.


1.  $6 + \underline{\quad} = 8$




2.  $5 + \underline{\quad} = 9$




3.  $7 + \underline{\quad} = 8$



4.  $3 + \underline{\quad} = 9$




5.  $1 + \underline{\quad} = 7$



6.  $2 + \underline{\quad} = 4$



7.  $4 + \underline{\quad} = 9$



8.  $5 + \underline{\quad} = 7$

