

Name : _____




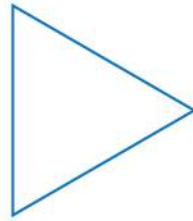

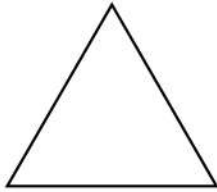
Date : _____



Draw and Rotate 2D Shapes



Here are some 2D shapes on the worksheet. Can you draw 3 more shapes by rotating the first shape?



When a shape is fully rotated, what happens?

Solve :

