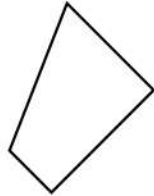
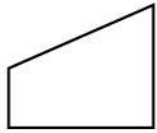




# Complete Patterns by Rotating 2D Shapes

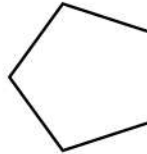
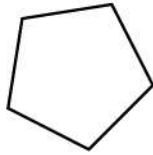
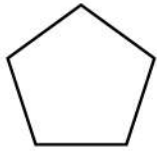
Here are some 2D shapes on the worksheet. Can you complete patterns by rotating 2D shapes?

1.



\_\_\_\_\_

2.



\_\_\_\_\_

3.



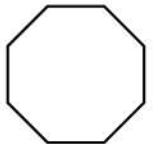
\_\_\_\_\_

4.




\_\_\_\_\_

5.



\_\_\_\_\_

6.




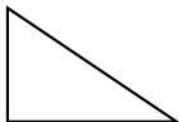
\_\_\_\_\_

7.



\_\_\_\_\_

8.



\_\_\_\_\_

