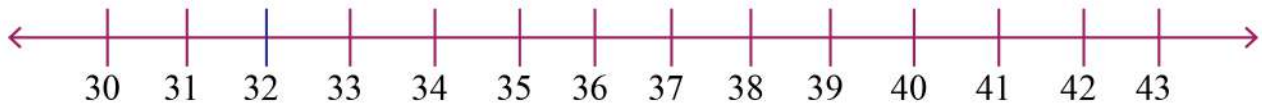


Name: _____

Comparing Numbers on Number Lines to 50



1. 38 is _____ than 40.

6. 37 is _____ than 35.

2. 35 is _____ than 39.

7. 35 is _____ than 38.

3. 30 is _____ than 35.

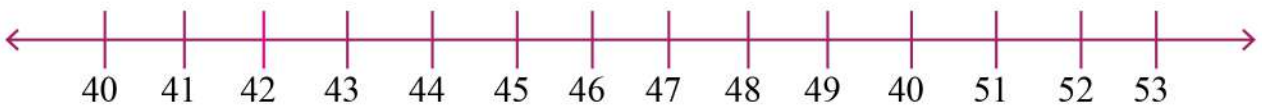
8. 40 is _____ than 41.

4. 39 is _____ than 31.

9. 39 is _____ than 43.

5. 36 is _____ 36.

10. 36 is _____ than 32.



1. 42 is _____ than 41.

6. 47 is _____ than 50.

2. 41 is _____ than 42.

7. 45 is _____ than 41.

3. 44 is _____ than 48.

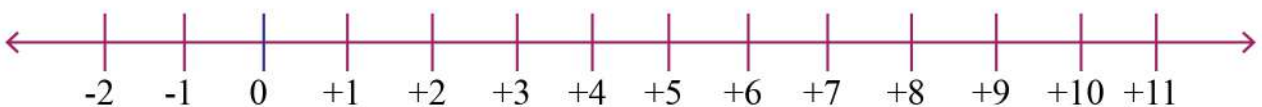
8. 40 is _____ than 42.

4. 46 is _____ than 45.

9. 49 is _____ than 43.

5. 47 is _____ than 45.

10. 46 is _____ than 44.



1. 8 is _____ than 3.

6. 9 is _____ than 3.

2. 6 is _____ than 11.

7. 8 is _____ than 11.

3. 9 is _____ than 7.

8. 9 is _____ 9.

4. 2 is _____ than 5.

9. 10 is _____ than 1.

5. 4 is _____ than 3.

10. 6 is _____ than 7.