


Date: _____


Name: _____

Measurement of Length Using Scales

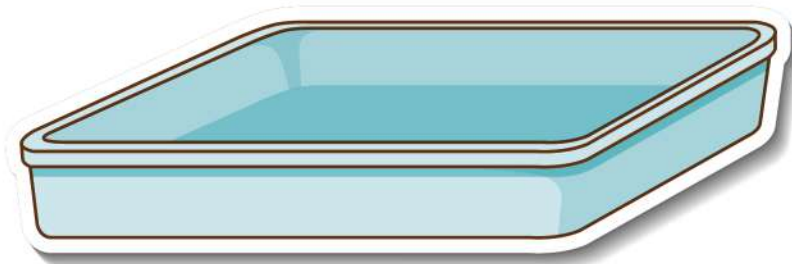
Cut the ruler from the worksheet and measure the following pictures



Diameter of the basket: _____ inches



Length of the pizza slice: _____ inches



Length and breadth of the tub: _____ inches




Date: _____

Name: _____

Measurement of Length Using Scales

Cut the ruler from the worksheet and measure the following pictures



Height of the giraffe: _____ centimeters



Length of the drums: _____ centimeters



Length of the mirror: _____ centimeters

