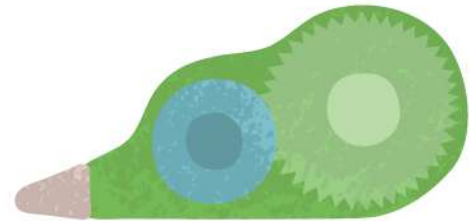
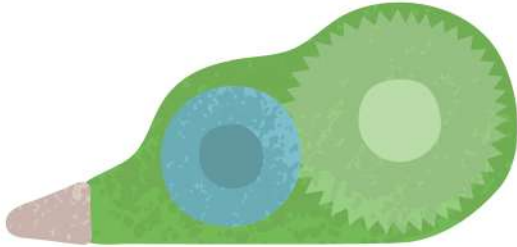


Date: _____

Name: _____

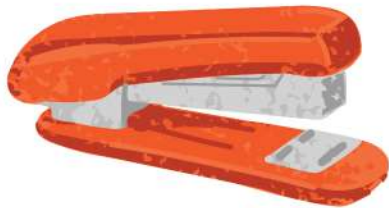
Measure the Lengths & Use Symbols to Compare

Write down the lengths and compare with $>$, $<$, $=$ symbols



Length: _____

Length: _____



Length: _____

Length: _____



Length: _____

Length: _____

