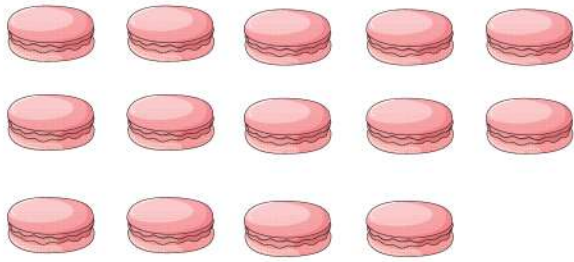


Name: _____

Counting and Comparing Numbers to 20

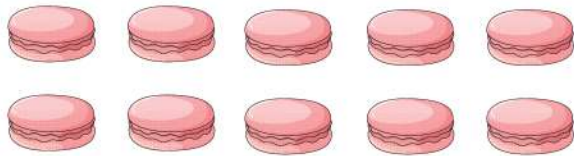



How many  ? _____



How many  ? _____

Which one is more?




How many  ? _____



How many  ? _____

Which one is less?



How many  ? _____



How many  ? _____

Which one is more?

