


Name: _____



Counting and Comparing Numbers to 20

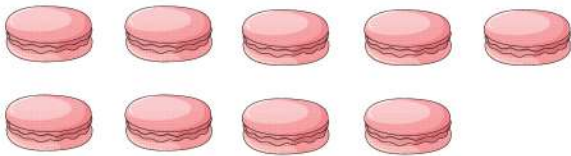


How many  ? _____



How many  ? _____

Which one is more?  



How many  ? _____



How many  ? _____

Which one is less?  



How many  ? _____



How many  ? _____

Which one is more? 