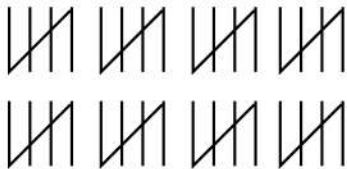


Filling the Blanks by Counting Tally Marks

Fill the blanks of these addition and subtraction problems after counting the tally marks.


$$40 + \underline{\hspace{2cm}} = 85$$



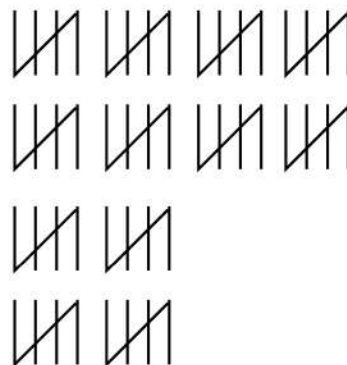
$$10 + \underline{\hspace{2cm}} = 30$$



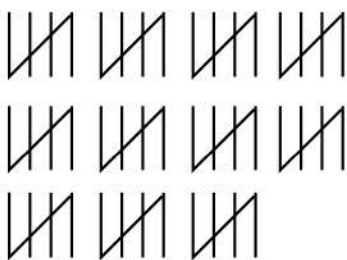
$$80 - \underline{\hspace{2cm}} = 60$$



$$50 + \underline{\hspace{2cm}} = 75$$



$$55 + \underline{\hspace{2cm}} = 72$$



$$54 - \underline{\hspace{2cm}} = 38$$

