






Finding Missing Tally Marks from Patterns

1)  ,  ,  ,  , _____ , 

2)  ,  ,  ,  , _____ , 

3)  ,  ,  , _____ ,  , 

4)  ,  ,  ,  , _____ , 

5)  ,  ,  ,  , _____ , 

6)  ,  ,  ,  , _____ ,  , 