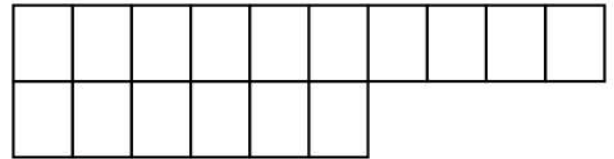

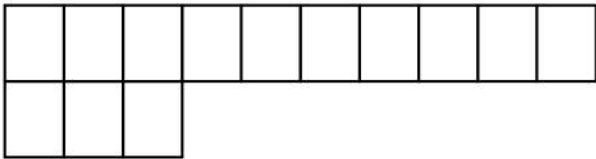


Name: \_\_\_\_\_

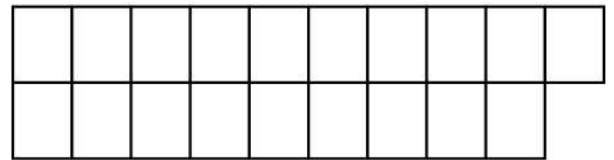
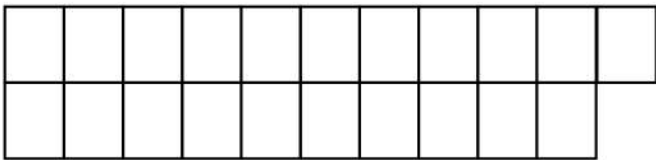
## Addition and Subtraction Facts to 10 with Blocks

Complete these number blocks with the help of addition and subtraction facts to 10



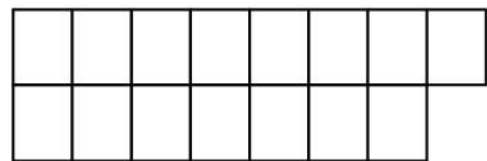
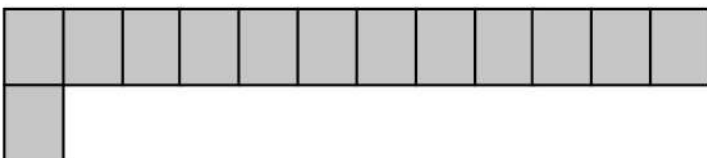
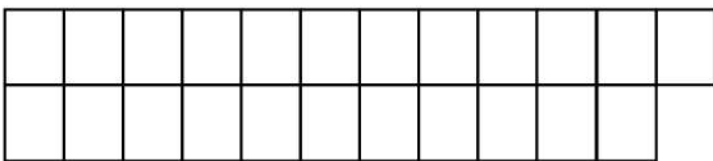
$$\square - \square = 20$$

$$\square - \square = 20$$



$$\square - \square = 20$$

$$\square - \square = 20$$



$$\square - \square = 20$$

$$\square - \square = 20$$

