


Date :


Name :




# Doing Subtraction Using Ten Frames Worksheet




$$20 - \underline{9} = 11$$



$$20 - \underline{\quad} = 20$$



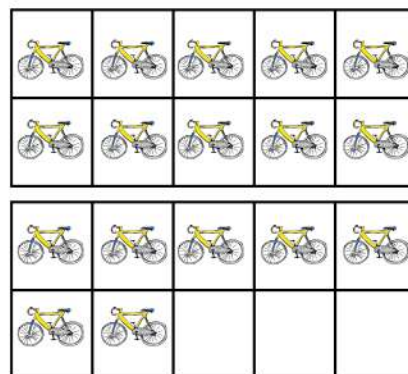
$$20 - \underline{\quad} = 13$$



$$20 - \underline{\quad} = 15$$



$$20 - \underline{\quad} = 19$$



$$20 - \underline{\quad} = 17$$

