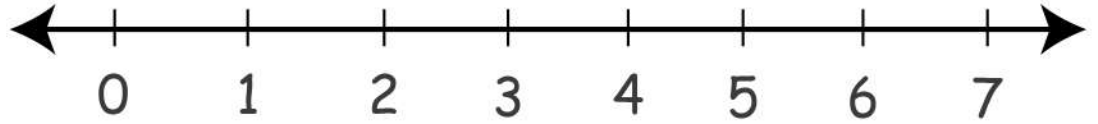


Date: _____

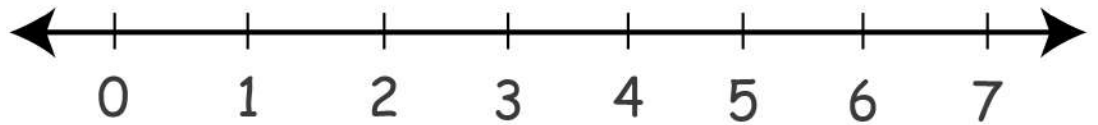
Name: _____

Doing Addition with Number Line Worksheet

$5 + 2 = \square$



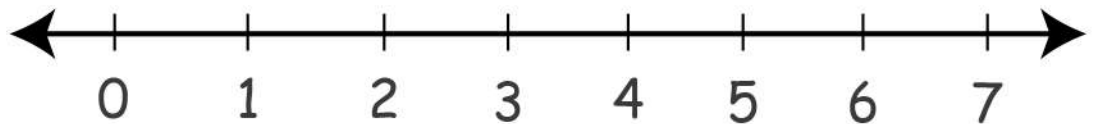
$2 + 2 = \square$



$1 + 3 = \square$



$2 + 5 = \square$



$0 + 4 = \square$



$1 + 4 = \square$



$3 + 3 = \square$

