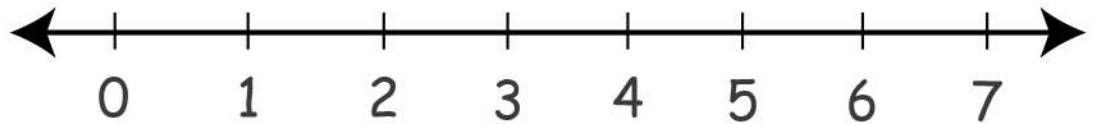


Date: _____

Name: _____

Doing Addition with Number Line Worksheet

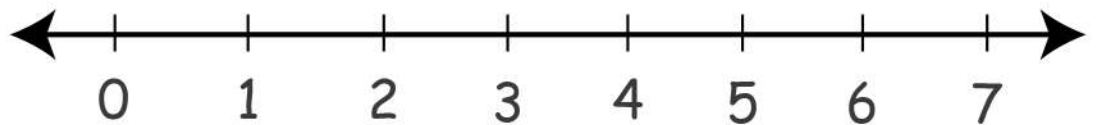
$0 + 3 = \square$



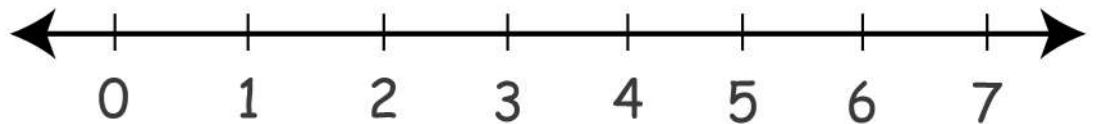
$5 + 1 = \square$



$4 + 2 = \square$



$3 + 4 = \square$



$1 + 5 = \square$



$0 + 5 = \square$



$4 + 3 = \square$

