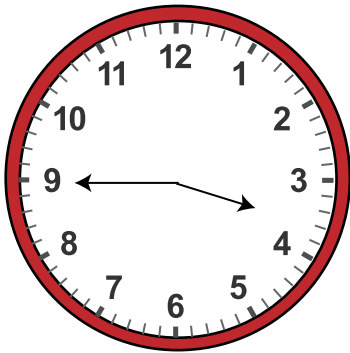


Date:

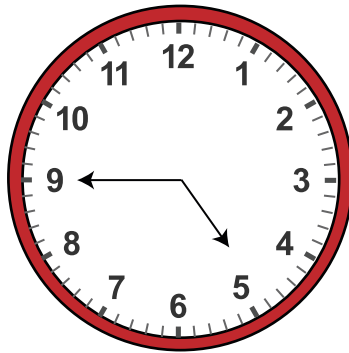
Name:

## Solving Multiple Choice with Telling Time to the Quarter Hours Worksheet


Choose the correct answer from the options given below each clock



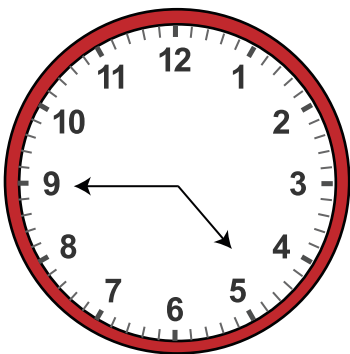
- a. 14:30 pm
- b. 16' o clock
- c. Three Thirty
- d. 15:45 pm




- a. 16:45 pm
- b. 16' o clock
- c. Six Thirty
- d. 17:00 pm




- a. 19 :45 am
- b. 7' o clock
- c. Eight Thirty
- d. 6:00 am



- a. 4 :45 am
- b. 6' o clock
- c. Five Thirty
- d. 4:00 am



- a. 6: 45 am
- b. 5' o clock
- c. Six Thirty
- d. 5:00 am



- a. 8 :45 am
- b. 8' o clock
- c. Seven Thirty
- d. 9:00 am