



Name :

Date :



Solving Vertical Addition with Pictures up to 10





$$\begin{array}{r} 3 \\ + 4 \\ \hline \end{array}$$

$$\begin{array}{r} 2 \\ + 7 \\ \hline \end{array}$$



$$\begin{array}{r} 6 \\ + 4 \\ \hline \end{array}$$



$$\begin{array}{r} 4 \\ + 4 \\ \hline \end{array}$$






$$\begin{array}{r} 5 \\ + 1 \\ \hline \end{array}$$

$$\begin{array}{r} 3 \\ + 6 \\ \hline \end{array}$$

$$\begin{array}{r} 3 \\ + 3 \\ \hline \end{array}$$

$$\begin{array}{r} 1 \\ + 4 \\ \hline \end{array}$$

