





Name :



Date :

Solving Vertical Addition with Pictures up to 20 Worksheets







$$\begin{array}{r}
 6 \\
 + 6 \\
 \hline
 12
 \end{array}$$





$$\begin{array}{r}
 4 \\
 + 7 \\
 \hline
 \end{array}$$



$$\begin{array}{r}
 5 \\
 + 7 \\
 \hline
 \end{array}$$



$$\begin{array}{r}
 11 \\
 + 0 \\
 \hline
 \end{array}$$


$$\begin{array}{r}
 5 \\
 + 9 \\
 \hline
 \end{array}$$



$$\begin{array}{r}
 13 \\
 + 6 \\
 \hline
 \end{array}$$



$$\begin{array}{r}
 3 \\
 + 12 \\
 \hline
 \end{array}$$



$$\begin{array}{r}
 8 \\
 + 4 \\
 \hline
 \end{array}$$



