


Name :

Date :

# Solving Vertical Addition with Pictures up to 20 Worksheets




$$\begin{array}{r} 2 \\ + 13 \\ \hline \end{array}$$



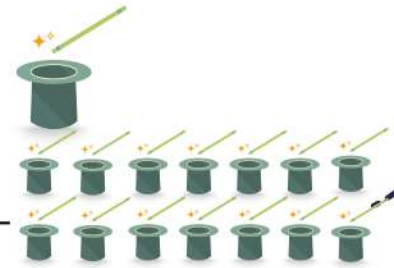
$$\begin{array}{r} 5 \\ + 8 \\ \hline \end{array}$$



$$\begin{array}{r} 6 \\ + 2 \\ \hline \end{array}$$




$$\begin{array}{r} 1 \\ + 14 \\ \hline \end{array}$$



$$\begin{array}{r} 9 \\ + 5 \\ \hline \end{array}$$



$$\begin{array}{r} 15 \\ + 1 \\ \hline \end{array}$$



$$\begin{array}{r} 20 \\ + 0 \\ \hline \end{array}$$



$$\begin{array}{r} 2 \\ + 16 \\ \hline \end{array}$$

