

Thanks for Downloading!

You've Got This Math

YOU MAY...

1. Print as many copies as you would like for your OWN personal use
2. Save this file on YOUR computer
3. Share on a blog, facebook page, ect as long as there is a direct link to You've Got This


DO NOT...

1. Make copies to give to your fellow teachers or friends. Please share the link with them so they can download their own personal copy.
2. Save to any file that can be accessed by anyone besides you. This includes dropbox, 4shared, facebook groups, shared drives, ect
3. E-mail just the PDF
4. Claim this printable as your own
5. Post just the PDF on your blog, facebook page, ect
6. Sell or profit in any way from the PDF




You May Also Like:

Area and Perimeter Word Problem - 2 Levels



Area of a Triangle



Area with Gumdrops



Area and Perimeter with Pattern Blocks

Prep - Work

- Print of sheets
- Laminate if you want them to be used in a center
- Gather up dry erase markers or pencils and the square pattern blocks.

Directions:

- Have the children fill in the boxes with the pattern blocks.
- Figure out the area by counting how many squares they used.
- Figure out the perimeter by counting the outside edges of the square.



What is the area?


Use your square pattern block to figure out the area and perimeter of each shape.



Area: _____
Perimeter: _____



Area: _____
Perimeter: _____



Area: _____
Perimeter: _____



Area: _____
Perimeter: _____



What is the area?

Use your square pattern block to figure out the area and perimeter of each shape.



Area: _____
Perimeter: _____



Area: _____
Perimeter: _____




Area: _____
Perimeter: _____



What is the area?

Use your square pattern block to figure out the area and perimeter of each shape.



Area: _____
Perimeter: _____




Area: _____
Perimeter: _____



What is the area?

Use your square pattern block to figure out the area and perimeter of each shape.



Area: _____
Perimeter: _____




Area: _____
Perimeter: _____



What is the area?

Use your square pattern block to figure out the area and perimeter of each shape.



Area: _____

Perimeter: _____